


CYCLE 4

Numeracy	1
Patterns	2
Measurement	3

1



How many flowers  are there?

2


Fill in the numbers.



3

Which is HEAVIER?

Circle.




CYCLE 4

Numeracy	4
Vocabulary	5
Geometry	6

--	--

4



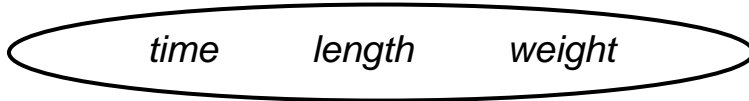
How many pencils ?

tens	ones

There are _____ pencils .

5

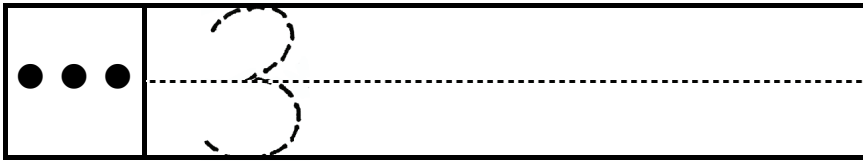
A ruler measures _____ .



6

Colour the .
TRIANGLES






CYCLE 4

Numeracy	7
Time / Money	8

7

Colour the THIRD (3rd) boat 



First


8



30¢ 40¢ 60¢

Circle the amount.

Circle the time.

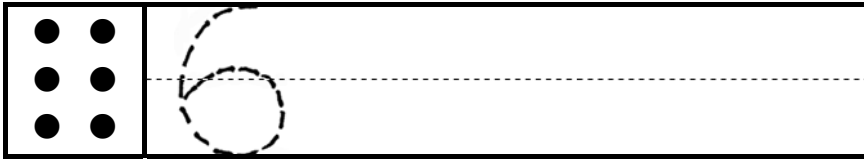


9:00

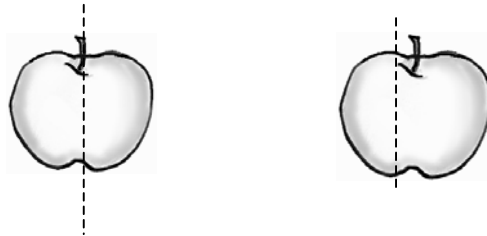
7:00

CYCLE 4


Numeracy	9
Algebra	10
Data Analysis	11



9 Colour the apple 🍏 that shows HALVES.



10 Circle the bag 🍷 that has more.



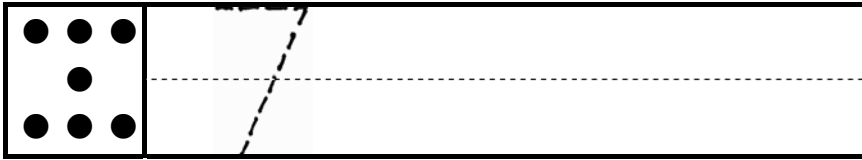
11 Finish the TALLY CHART.



FLOWERS

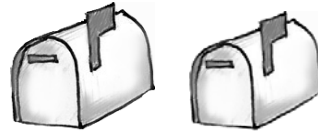
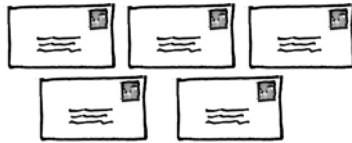
Monday Tuesday Wednesday Thursday Friday



CYCLE 4


Basic Operations	12
Problem solving	13

12



There are _____ more letters  than boxes .

13



birds in the tree

+ birds on the ground

birds in all